
GEOGRAPHY

9696/43

Paper 4 Advanced Human Geography Options

May/June 2018

INSERT

1 hour 30 minutes

READ THESE INSTRUCTIONS FIRST

This Insert contains all the resources referred to in the questions.



This document consists of **4** printed pages.



Fig. 1.1 for Question 1

Size of dairy herd (number of cows) and profit/loss in pence per litre of milk for selected farms in the UK, an HIC in Europe, 2013

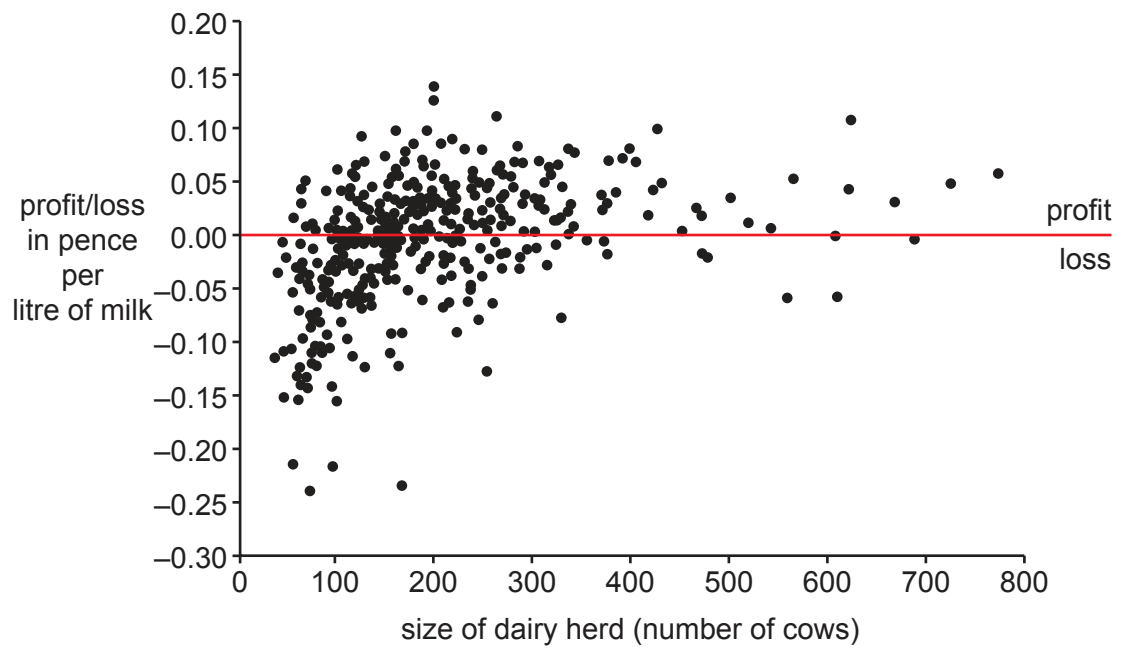


Fig. 4.1 for Question 4

Annual mean air pollution in urban areas, 2008–13

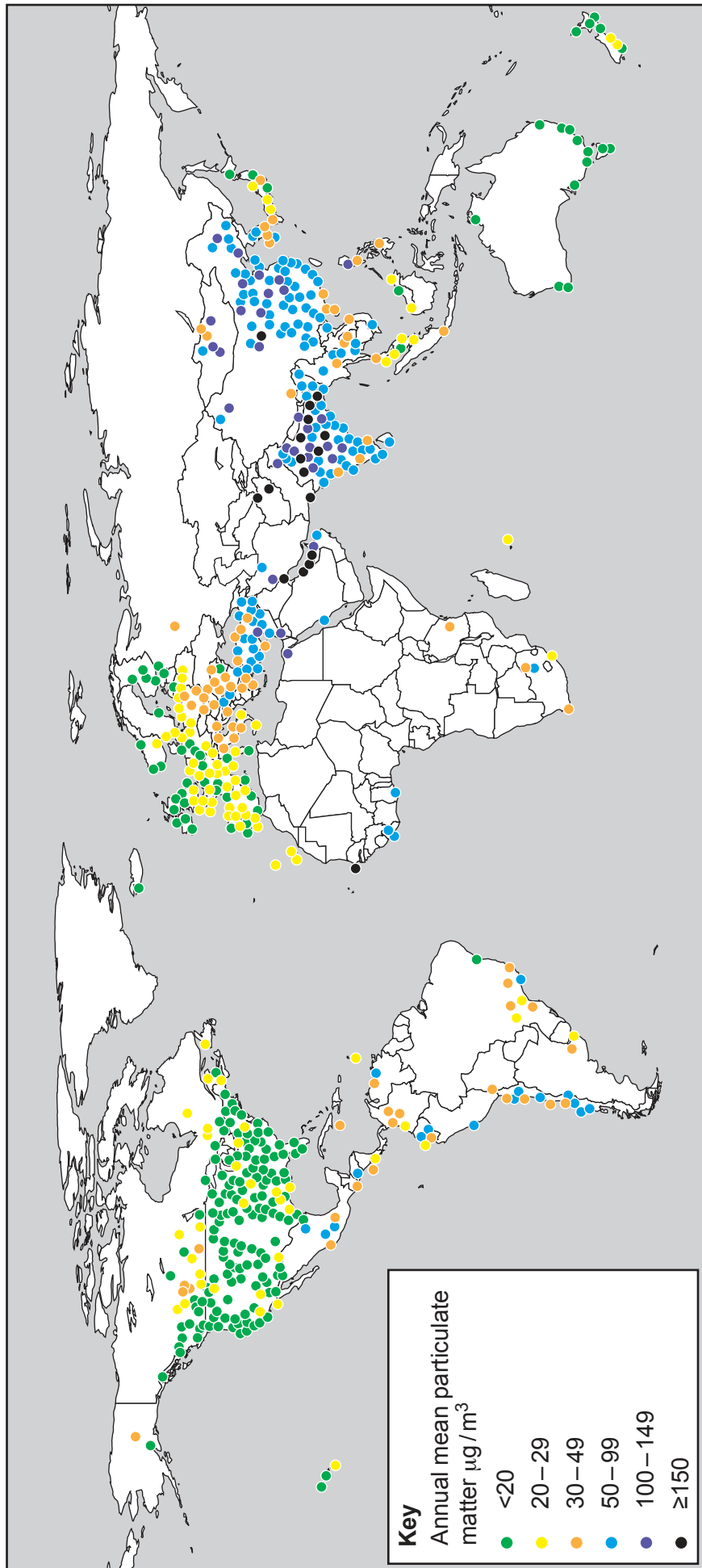


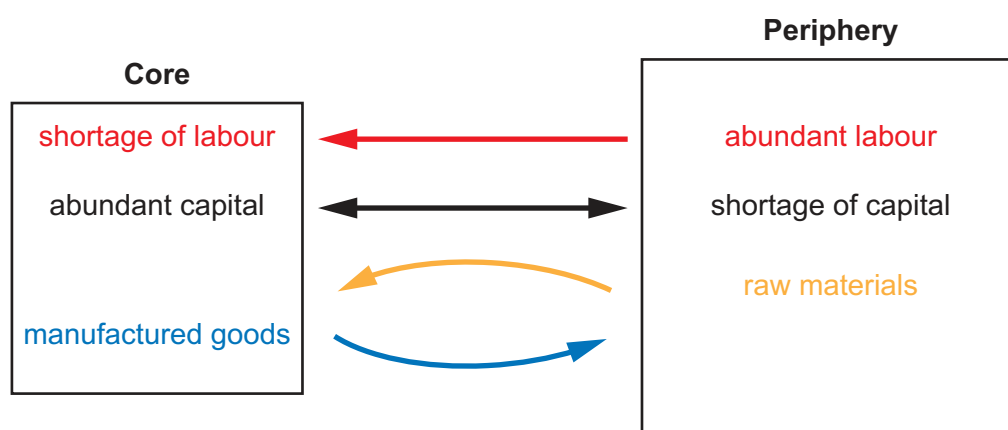
Table 7.1 for Question 7

Percentage of the world's Fairtrade farmers and farm workers, by world region, 2013

world region	percentage
Caribbean	3
Central America	9
South America	12
East Africa	49
West Africa	14
North Africa and the Middle East	1
Australasia	1
Southeast Asia	6
South Asia	5

Fig. 10.1 for Question 10

A simplified core-periphery model of regional development



The arrows represent flows of labour, capital, raw materials and manufactured goods.

Permission to reproduce items where third-party owned material protected by copyright is included has been sought and cleared where possible. Every reasonable effort has been made by the publisher (UCLES) to trace copyright holders, but if any items requiring clearance have unwittingly been included, the publisher will be pleased to make amends at the earliest possible opportunity.

To avoid the issue of disclosure of answer-related information to candidates, all copyright acknowledgements are reproduced online in the Cambridge International Examinations Copyright Acknowledgements Booklet. This is produced for each series of examinations and is freely available to download at www.cie.org.uk after the live examination series.

Cambridge International Examinations is part of the Cambridge Assessment Group. Cambridge Assessment is the brand name of University of Cambridge Local Examinations Syndicate (UCLES), which is itself a department of the University of Cambridge.